



Monotonost funkcije



MONOTONOST FUNKCIJE

Neka je funkcija $f(x)$ diferencijabilna na intervalu (a,b) tj. ima izvod u svakoj tački toga intervala.

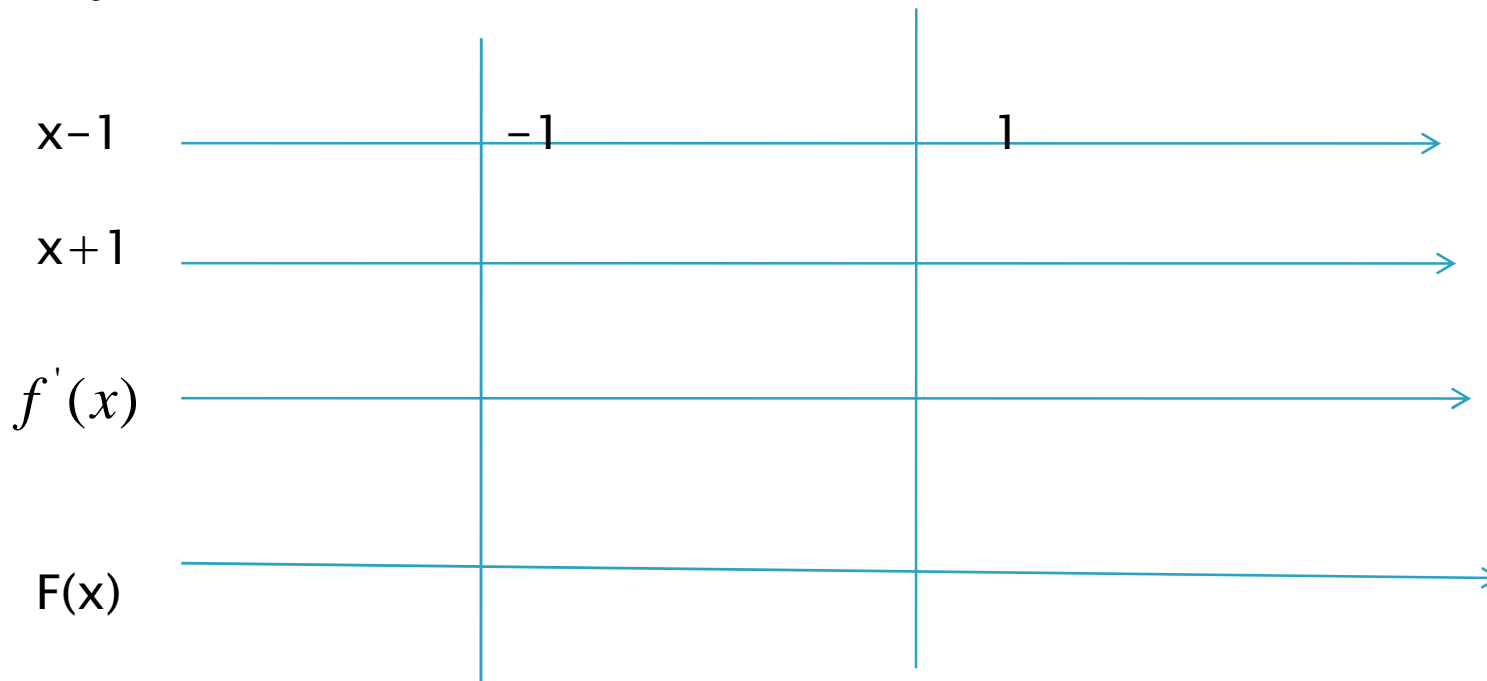
1. Ako je $f'(x) > 0 \quad \forall x \in (a,b)$ tada je funkcija $f(x)$ **rastuća** na intervalu (a,b)
2. Ako je $f'(x) < 0 \quad \forall x \in (a,b)$ tada je funkcija $f(x)$ **opadajuća** na intervalu (a,b)



Primjer (osnovni): Odrediti intervale monotonosti funkcije

$$f(x) = x^3 - 3x$$

$$f'(x) = 3x^2 - 3 = 3(x^2 - 1) = 3(x-1)(x+1)$$



Zadaci :

1. Odrediti intervale monotonosti funkcije

$$y = -x^3 - 4x^2 - 4x$$

$$y' = -3x^2 - 8x - 4, y' = 0 \Leftrightarrow -3x^2 - 8x - 4 = 0$$

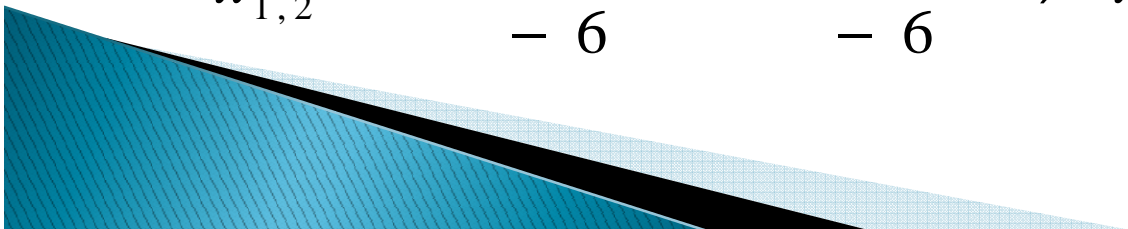
$$a = -3$$

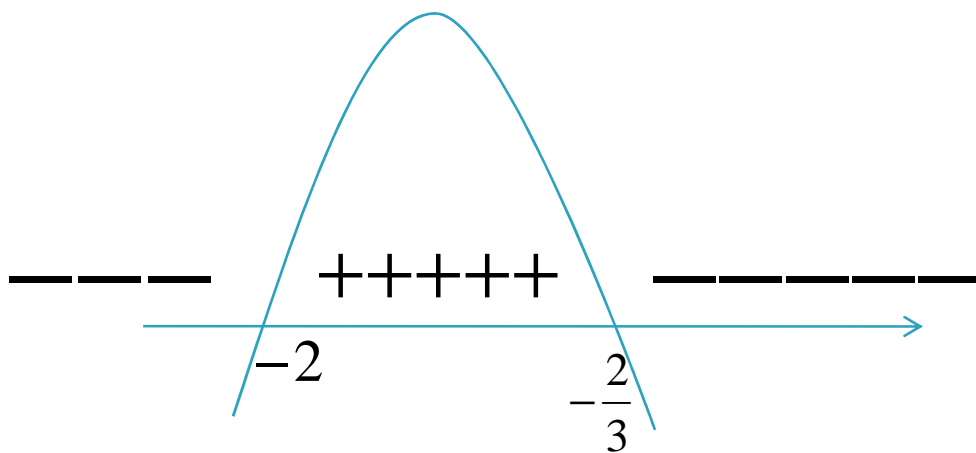
$$b = -8$$

$$c = -4$$

$$x_{1,2} = \frac{8 \pm \sqrt{64 - 4 \cdot (-3) \cdot (-4)}}{2 \cdot (-3)}$$


$$x_{1,2} = \frac{8 \pm \sqrt{16}}{-6} = \frac{8 \pm 4}{-6} \Rightarrow x_1 = -2, x_2 = -\frac{2}{3}$$





$$y' > 0 \text{ za } x \in \left(-2, -\frac{2}{3}\right) \Rightarrow \text{f rostuća}$$

$$y' < 0 \text{ za } x \in \left(-\infty, -2\right) \cup \left(-\frac{2}{3}, +\infty\right) \Rightarrow \text{f opadajuća}$$



2.


$$y = x - \ln x$$

$$y' = 1 - \frac{1}{x} = \frac{x-1}{x}, x \neq 0$$


$$\frac{A}{B} > 0 \Leftrightarrow (A > 0 \wedge B > 0) \vee (A < 0 \wedge B < 0)$$

$$(x-1 > 0 \wedge x > 0) \vee (x-1 < 0 \wedge x < 0)$$

$$(x > 1 \wedge x > 0) \vee (x < 1 \wedge x < 0)$$



x	$(-\infty, 0)$	0	$(0, 1)$	1	$(1, +\infty)$
$x-1$	$-$		$-$		$+$
x	$-$		$+$		$+$
y'	$+$		$-$		$+$



Zadaci za vježbanje :

1. Odrediti intervale monotonosti datih funkcija

$$a) y = \frac{1}{3}x^3 - \frac{3}{2}x^2 - 4x$$

$$b) y = x^2 - \ln x^2$$

